



# Naujeevan

Prep. Academy

## WINTER BREAK

**31ST DEC. TO 8TH JANUARY 2023**



Dear Parents,



Holidays are an integral part of a student's life. It's a time for fun, a time to explore and a time to learn in different ways.

When holidays are given a meaningful direction, it results in a productive and enjoyable time. Let's use these holidays to pursue some hobbies and apply our minds creatively to learn new things and to bring a new change in the environment in our own individual way.

### Instructions-

- To help of your child when necessary.
- Do reading and writing practice daily.
- Office will remain open from 3rd January 2023.
- Academy will re-open from 9th January 2023.

**ENJOY YOUR VACATIONS AND WISHING YOU A VERY  
HAPPY NEW YEAR 2023.**

Kind Regards,  
NPA TEAM



**ENGLISH** -- Do complete page no. – 5,6 and 10 in My Holiday Activity Book.

A **preposition** is a word that connects nouns, pronouns and phrases to the other words in a sentence.

Example: The newspaper is on the couch.

Look at the picture and complete the sentences with the prepositions from the word box.



- 1) The cat is \_\_\_\_\_ the fireplace.
- 2) The books are \_\_\_\_\_ the table.
- 3) The television is \_\_\_\_\_ the cabinet.
- 4) The boy is \_\_\_\_\_ the couch.
- 5) The girl is coloring a picture \_\_\_\_\_ crayons.
- 6) The books are \_\_\_\_\_ the shelf.
- 7) The crayons are \_\_\_\_\_ the box.
- 8) The couch is \_\_\_\_\_ the lamp and the armchair.

under	behind
with	on top of
in	beside
between	on

# Present Simple Tense

Read the sentences carefully and select the correct verb tense.

1. We often \_\_\_\_\_ ice-cream by our cousins. ( eat / eats )
2. Don and his brother \_\_\_\_\_ hiking on weekends. ( like , likes )
3. It \_\_\_\_\_ on the couch every night. ( sleep , sleeps )
4. My sister \_\_\_\_\_ me to the movies every Friday. ( drive , drives )
5. My father and I \_\_\_\_\_ breakfast on Saturdays. ( make , makes )
6. She \_\_\_\_\_ her favourite books at the library. ( read , reads )
7. You \_\_\_\_\_ fruits every Saturday at the market. ( buy , buys )
8. My family \_\_\_\_\_ at the temple every Thursday. ( pray , prays )
9. The lions often \_\_\_\_\_ very loudly. ( roar , roars )
10. I \_\_\_\_\_ pictures with my family on special occasions.  
( take , takes )

## समान अर्थवाले शब्द लिखें

वृक्ष - \_\_\_\_\_

सूर्य - \_\_\_\_\_

चिड़िया - \_\_\_\_\_

दुनिया - \_\_\_\_\_

कथा - \_\_\_\_\_

पुष्प - \_\_\_\_\_

बालक - \_\_\_\_\_



1. रंगीन शब्दों के विलोम से वाक्य पूरे करो।

सस्ते	निर्धन	हार
बुरा	कोमल	

क) पत्थर **कठोर** होता है लेकिन फूल \_\_\_\_\_।

ख) हमें हमेशा दूसरों का **भला** करना चाहिए \_\_\_\_\_ नहीं।

ग) चाँदी के दाम **महँगे** हो गए हैं पर सोने के दाम \_\_\_\_\_।

घ) कृष्ण **धनी** थे पर इनके मित्र सुदामा \_\_\_\_\_ थे।

ङ) क्रिकेट के मैच में भारत की टीम **जीत** गई और विपक्षी टीम \_\_\_\_\_ गई।

2. सही जोड़े बनाइए।

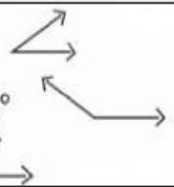
अपना	निंदा
प्रशंसा	सरल
आय	उजाला
कठिन	पराया
अँधेरा	व्यय
उदय	अज्ञान
स्वर्ग	कपूत
ज्ञान	रुकना
सपूत	अस्त
चलना	नरक

Classify each angle as acute, obtuse, right, or straight

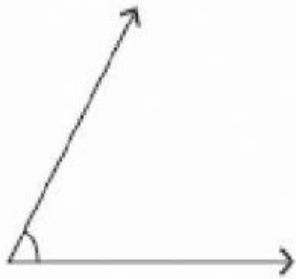
An acute angle is less than  $90^\circ$

An obtuse angle is more than  $90^\circ$

A right angle is equal to  $90^\circ$



1)



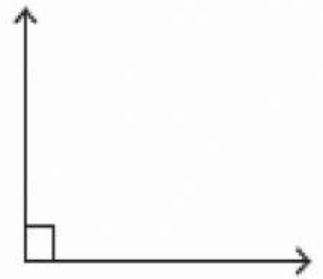
Type: \_\_\_\_\_

2)



Type: \_\_\_\_\_

3)



Type: \_\_\_\_\_

4)



Type: \_\_\_\_\_

5)



Type: \_\_\_\_\_

6)



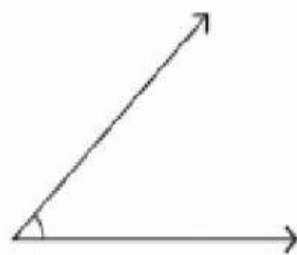
Type: \_\_\_\_\_

7)



Type: \_\_\_\_\_

8)



Type: \_\_\_\_\_

9)



Type: \_\_\_\_\_



## Adding and Subtracting Time



1. Add the following times:

a) 
$$\begin{array}{r} 4\text{hr } 15\text{min} \\ + 3\text{hr } 20\text{min} \\ \hline \end{array}$$

c) 
$$\begin{array}{r} 3\text{hr } 35\text{min} \\ + 2\text{hr } 35\text{min} \\ \hline \end{array}$$

b) 
$$\begin{array}{r} 6\text{hr } 25\text{min} \\ + 3\text{hr } 30\text{min} \\ \hline \end{array}$$

d) 
$$\begin{array}{r} 8\text{hr } 45\text{min} \\ + 5\text{hr } 55\text{min} \\ \hline \end{array}$$

2. Subtract the following

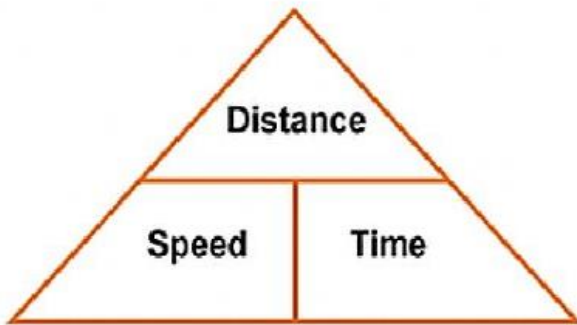
a) 
$$\begin{array}{r} 6\text{hr } 57\text{min} \\ - 2\text{hr } 35\text{min} \\ \hline \end{array}$$

c) 
$$\begin{array}{r} 9\text{hr } 25\text{min} \\ - 5\text{hr } 45\text{min} \\ \hline \end{array}$$

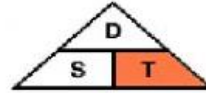
b) 
$$\begin{array}{r} 7\text{hr } 48\text{min} \\ - 4\text{hr } 37\text{min} \\ \hline \end{array}$$

d) 
$$\begin{array}{r} 11\text{hr } 12\text{min} \\ - 1\text{hr } 54\text{min} \\ \hline \end{array}$$

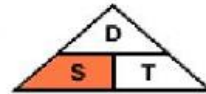
## SPEED, DISTANCE AND TIME



$$\text{Distance} = \text{Speed} \times \text{Time}$$



$$\text{Time} = \frac{\text{Distance}}{\text{Speed}}$$



$$\text{Speed} = \frac{\text{Distance}}{\text{Time}}$$

## SPEED

1. Sidek travels 450 km in 5 hours. What was his speed in km/h ?

Speed = ?

Distance =

Time =

$$\text{Speed} = \frac{\quad}{\quad} \div \frac{\quad}{\quad} = \quad \text{km/h}$$

2. Munirah runs 200m in 25 seconds. What is her speed in m/s ?

Speed = ?

Distance =

Time =

$$\text{Speed} = \frac{\quad}{\quad} \div \frac{\quad}{\quad} = \quad \text{m/s}$$

SOCIAL STUDIES –DO complete page no. 38 in My Holiday Activity Book.

ACTIVITY – Paste pictures of some Freedom Fighters with name and slogan in note book.

COMPUTER – Do complete page no. 45 in My Holiday Activity Book.

G.K. – Do complete page no. 52, 53 and 54 in My Holiday Activity Book.